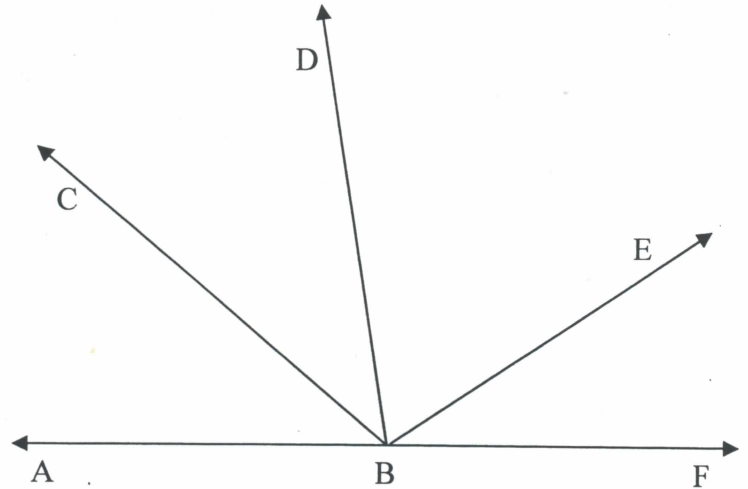


Unit 2 Worksheet 4 (using protractors)

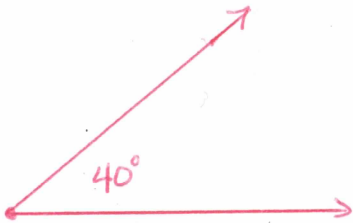
Use a protractor to measure the following angles.

1. $\angle ABC = 40^\circ$
2. $\angle ABD = 81^\circ - 82^\circ$
3. $\angle CBD = 41^\circ$
4. $\angle CBE = 105^\circ - 106^\circ$
5. $\angle ABE = 146^\circ$

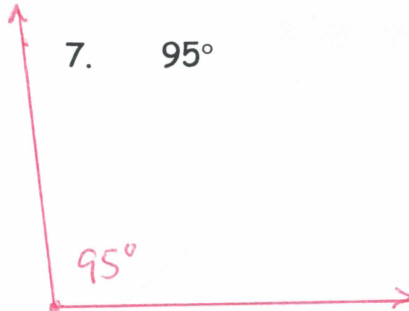


Use a protractor to help you draw angles with the following measures.

6. 40°



7. 95°



8. 130°

